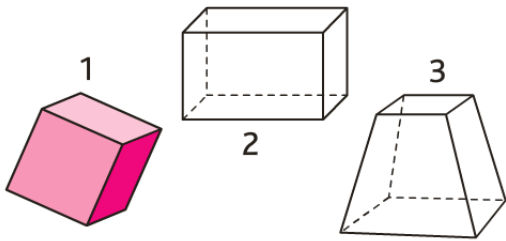


1 Skriv anv ar soludoù

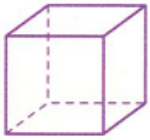


1:

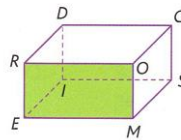
2:

3:

2 Kloka an diskrivadenoù.



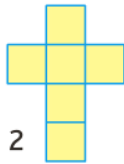
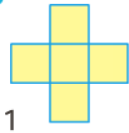
..... tal, beg ha ker en deus ur c'hub. Rep tal ar c'hub a zo



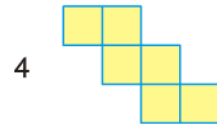
..... tal, beg ha ker en deus ur pavez. An tal livet a zo ur
An c'her [RO] a zo
gant ar c'her [EM] hag ar c'her [RE] a zo gant ar c'her [EM].

3 Barren patromoù n'int ket patromoù ar c'hub.

a. *

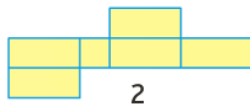
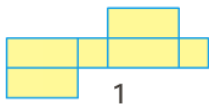


b. **

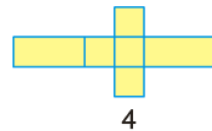
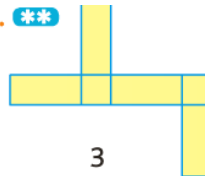


4 Kelc'h patromoù ar pavez.

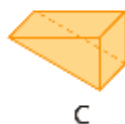
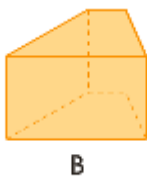
a. *



b. **



5 Sell pizh ouzh al lunoù ha kloka an daolenn.



	A	B	C
Niver a daloù			
Niver a geroù			
Niver a vegoù			