

Prénom :

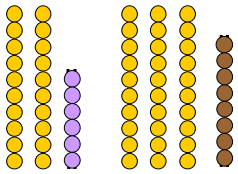
Date :

L'addition posée avec retenue 1

Calcul

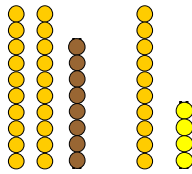
1. Calcule ces additions :

$26 + 38 = \dots\dots$



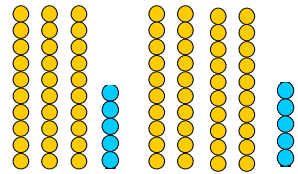
$$\begin{array}{r} 26 \\ + 38 \\ \hline \end{array}$$

$28 + 14 = \dots\dots$



$$\begin{array}{r} 28 \\ + 14 \\ \hline \end{array}$$

$35 + 24 = \dots\dots$



$$\begin{array}{r} 35 \\ + 24 \\ \hline \end{array}$$

2. Calcule ces additions posées :

$$\begin{array}{r} \text{d} \quad \text{u} \\ 15 \\ + 37 \\ \hline \end{array}$$

$$\begin{array}{r} \text{d} \quad \text{u} \\ 57 \\ + 32 \\ \hline \end{array}$$

$$\begin{array}{r} \text{d} \quad \text{u} \\ 55 \\ + 16 \\ \hline \end{array}$$

$$\begin{array}{r} \text{d} \quad \text{u} \\ 33 \\ + 28 \\ \hline \end{array}$$

$$\begin{array}{r} 15 \\ + 26 \\ \hline \end{array}$$

$$\begin{array}{r} 59 \\ + 22 \\ \hline \end{array}$$

$$\begin{array}{r} 43 \\ + 53 \\ \hline \end{array}$$

$$\begin{array}{r} 28 \\ + 54 \\ \hline \end{array}$$

$$\begin{array}{r} 54 \\ + \quad 7 \\ \hline \end{array}$$

$$\begin{array}{r} 47 \\ + 24 \\ \hline \end{array}$$

$$\begin{array}{r} 65 \\ + 29 \\ \hline \end{array}$$

$$\begin{array}{r} 21 \\ + 34 \\ \hline \end{array}$$

Prénom :

Date :

L'addition posée avec
retenue 2

Calcul

1. Calcule ces additions :

$$\begin{array}{r} \text{d} \quad \text{u} \\ 2 \quad 5 \\ + 3 \quad 8 \\ \hline \cdot \quad \cdot \end{array}$$

$$\begin{array}{r} \text{d} \quad \text{u} \\ 2 \quad 7 \\ + 2 \quad 5 \\ \hline \cdot \quad \cdot \end{array}$$

$$\begin{array}{r} \text{d} \quad \text{u} \\ 5 \quad 4 \\ + 2 \quad 6 \\ \hline \cdot \quad \cdot \end{array}$$

$$\begin{array}{r} \text{d} \quad \text{u} \\ 4 \quad 1 \\ + 3 \quad 8 \\ \hline \cdot \quad \cdot \end{array}$$

$$\begin{array}{r} 4 \quad 5 \\ + 2 \quad 5 \\ \hline \cdot \quad \cdot \end{array}$$

$$\begin{array}{r} 6 \quad 3 \\ + 2 \quad 9 \\ \hline \cdot \quad \cdot \end{array}$$

$$\begin{array}{r} 2 \quad 5 \\ + 5 \quad 7 \\ \hline \cdot \quad \cdot \end{array}$$

$$\begin{array}{r} 4 \quad 3 \\ + 3 \quad 0 \\ \hline \cdot \quad \cdot \end{array}$$

2. Pose et calcule ces additions :

$44 + 16 =$

$$\begin{array}{r} \cdot \quad \cdot \\ + \cdot \quad \cdot \\ \hline \cdot \quad \cdot \end{array}$$

$28 + 21 =$

$$\begin{array}{r} \cdot \quad \cdot \\ + \cdot \quad \cdot \\ \hline \cdot \quad \cdot \end{array}$$

$25 + 47 =$

$$\begin{array}{r} \cdot \quad \cdot \\ + \cdot \quad \cdot \\ \hline \cdot \quad \cdot \end{array}$$

$56 + 26 =$

$$\begin{array}{r} \cdot \quad \cdot \\ + \cdot \quad \cdot \\ \hline \cdot \quad \cdot \end{array}$$

$25 + 47 =$

$$\begin{array}{r} + \\ \hline \cdot \quad \cdot \end{array}$$

$43 + 19 =$

$$\begin{array}{r} + \\ \hline \cdot \quad \cdot \end{array}$$

$29 + 55 =$

$$\begin{array}{r} + \\ \hline \cdot \quad \cdot \end{array}$$

$59 + 35 =$

$$\begin{array}{r} + \\ \hline \cdot \quad \cdot \end{array}$$