



CARTABLE
FANTASTIQUE

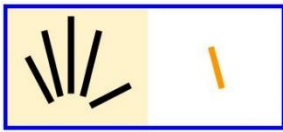
CYCLE 2 - LES NOMBRES

Compter jusqu'à 10

Le cahier d'exercices pour la classe



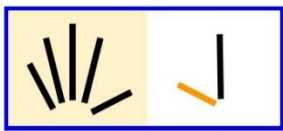
1 Entoure le bon nombre.



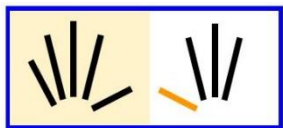
→ 5 6 7 8 9 10



→ 5 6 7 8 9 10




→ 5 6 7 8 9 10



→ 5 6 7 8 9 10

2 Compte et entoure le bon nombre.



1 2 3 4 5 6 7 8 9 10



1 2 3 4 5 6 7 8 9 10




1 2 3 4 5 6 7 8 9 10




3 Relie chaque nombre à son carton.

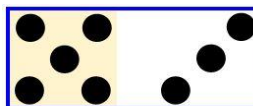
6 •



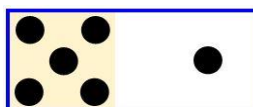
7 •



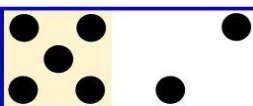
8 •



9 •



10 •



4 Colorie oui ou non pour répondre à la question.


Est-ce que tu as 10 sapins ?



oui

non

Est-ce que tu as 10 sapins ?



oui

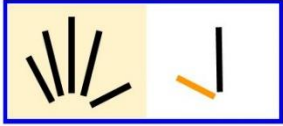
non



5 Relie chaque nombre à son carton.



• 9



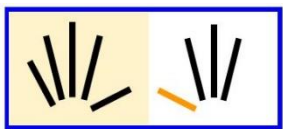
• 6



• 10

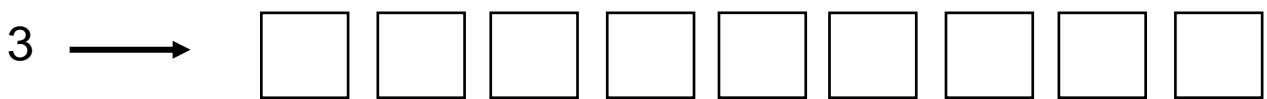
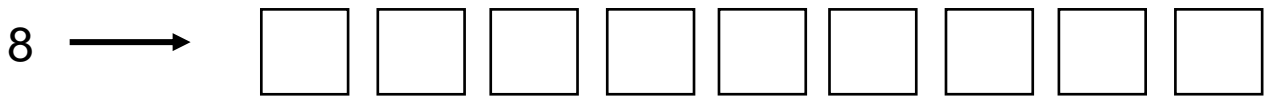
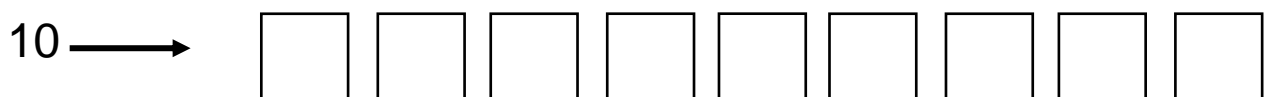



• 8



• 7

6 Colorie le bon nombre de carrés.





7 Compte et écris le nombre.



→ Il y a _____ pommes.



→ Il y a _____ voitures.



→ Il y a _____ pommes.



→ Il y a _____ voitures.




→ Il y a _____ pommes.




8 Entoure le bon carton.

Qu'est-ce qui fait 7 ?



Qu'est-ce qui fait 10 ?



Qu'est-ce qui fait 9 ?

