


EX
N 06

La centaine

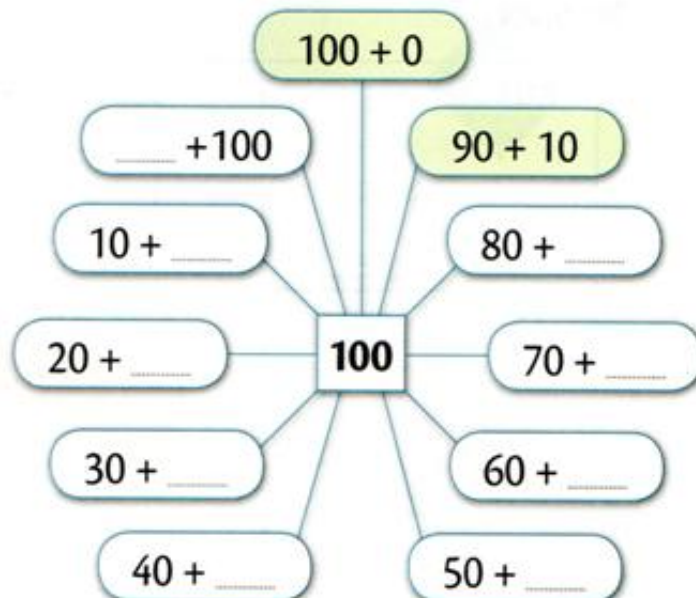
1- Entoure 100 billes à chaque fois.



2- Dessine les billes qui manquent pour faire exactement 100.



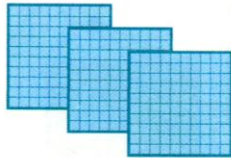
3- Complète



EX
N 06

La centaine

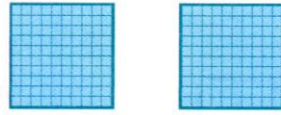
4- Complète comme dans l'exemple.




300

trois cents

$$100 + 100 + 100 = 300$$




.....



.....

5- Complète.



6- Complète avec <, > ou =.

300 ○ six cents

7 centaines ○ 500

4 centaines ○ 400

cent ○ mille

deux cents ○ 2 centaines

6 centaines ○ 9 centaines