



**Les  
fourbes**



$5+5$


10

$9+9$


18

$4+4$

8



**Les  
doubles**




$8+8$


16

$3+3$

6



**Les  
doubles**




$7+7$

14


$10+10$

20



$6+6$

12



**Les  
fourbes**

