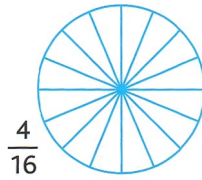
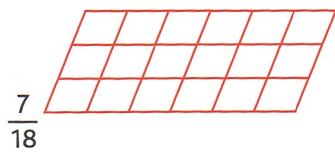
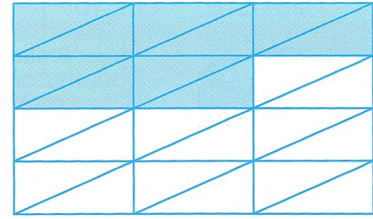
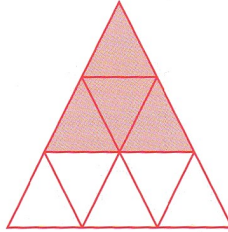
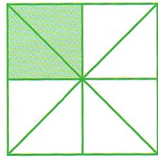


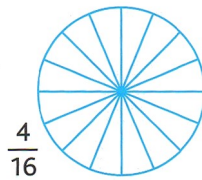
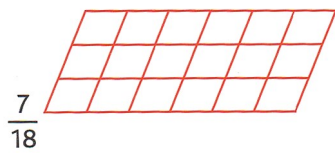
- 10** Colorie la partie qui correspond à la fraction.



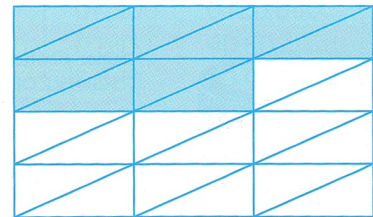

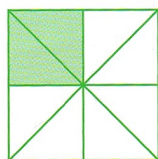
- 12** Pour chaque figure, écris la fraction correspondant à la partie coloriée.



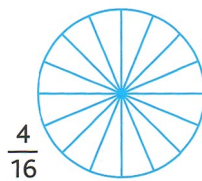
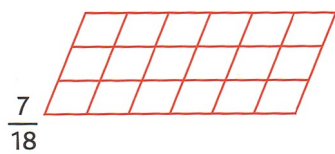
- 10** Colorie la partie qui correspond à la fraction.



- 12** Pour chaque figure, écris la fraction correspondant à la partie coloriée.



- 10** Colorie la partie qui correspond à la fraction.



- 12** Pour chaque figure, écris la fraction correspondant à la partie coloriée.

