



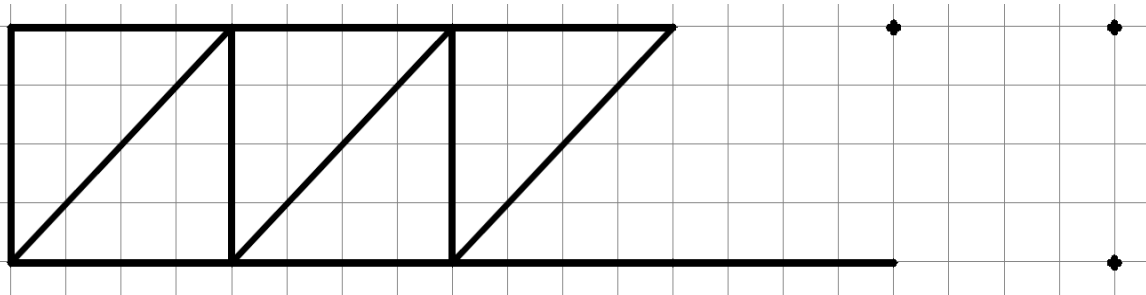




1 3

# Géométrie

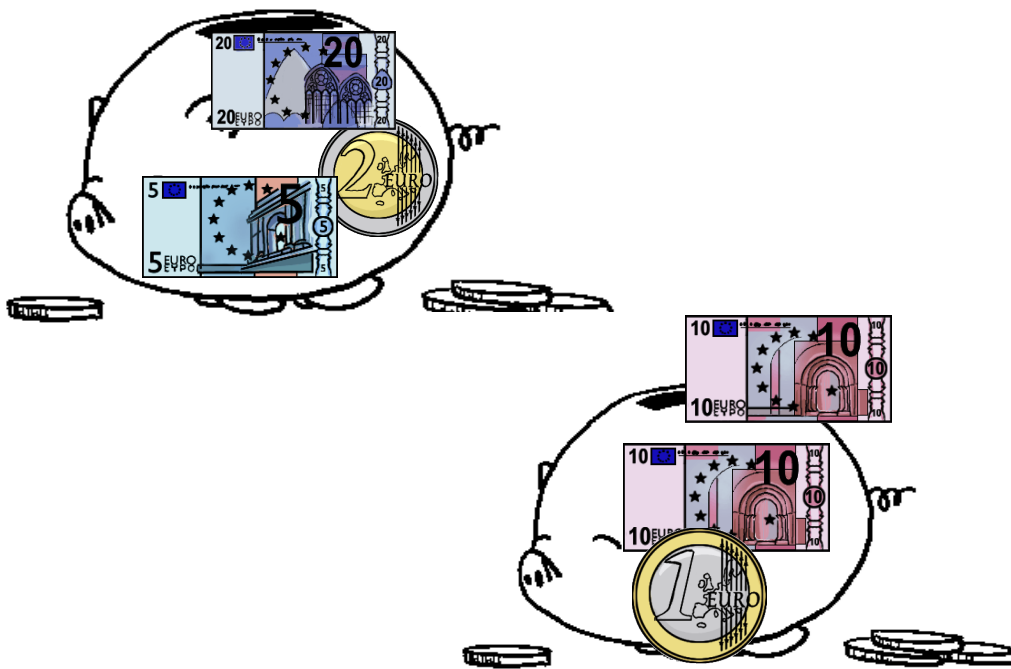
Je termine la frise et je colorie:



1 4

# Mesures

J'entoure la tirelire qui a le plus d'argent:



1 5

# Opérations

Je calcule les additions:



	7	3
+	2	8
<hr/>		

	5	7
+	3	9
<hr/>		

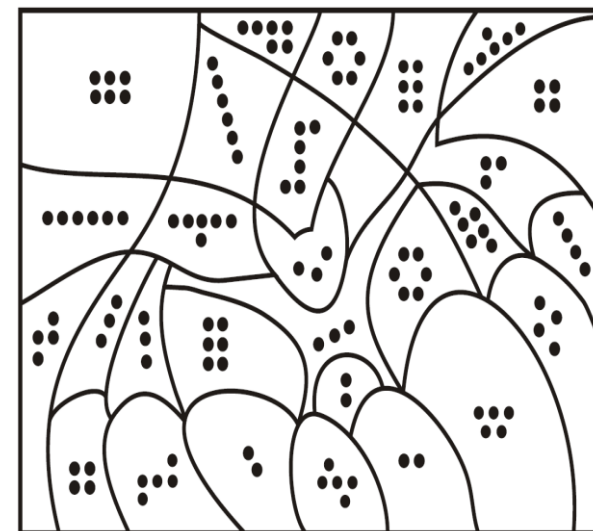
1 6

# Calcul

Je calcule en ligne:



- 10 + 4 = \_\_\_\_\_
- 10 + 2 = \_\_\_\_\_
- 20 + 5 = \_\_\_\_\_
- 30 + 5 = \_\_\_\_\_
- 40 + 3 = \_\_\_\_\_
- 10 + 8 = \_\_\_\_\_
- 20 + 9 = \_\_\_\_\_
- 30 + 6 = \_\_\_\_\_
- 20 + 4 = \_\_\_\_\_
- 50 + 6 = \_\_\_\_\_



2:vert foncé	3:bleu foncé	4:brun	5:vert clair	6:orange
--------------	--------------	--------	--------------	----------