
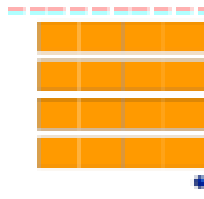






? Complete.



Combien à Dédé ?



Calcul : _____

Dédé a _____ euros.



Combien a Patti ?



Calcul : _____

Patti a _____ euros.



C'est _____ qui a le plus d'argent.

Calcule





$$10 + 5 + 2 + 3 =$$

$$5 + 5 + 1 + 2 =$$

$$10 + 5 + 2 + 2 =$$

$$10 + 3 + 2 + 1 =$$

Dessine les boîtes et les billes comme Picbille .

			
---	---	--	---

Dessine les puis barre au début.

$9 - 5 = \dots\dots$	$8 - 6 = \dots\dots$	$10 - 7 = \dots\dots$
$8 - 7 = \dots\dots$	$9 - 6 = \dots\dots$	$10 - 8 = \dots\dots$

Dessine

