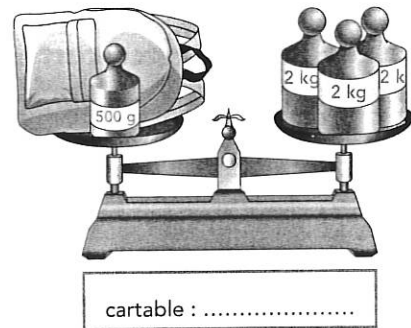


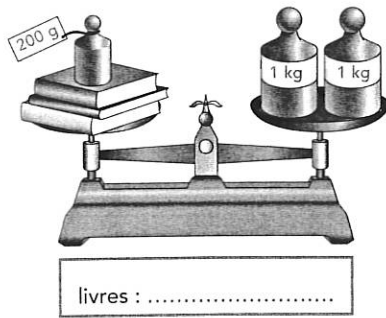




1 Quel est le poids de chaque objet ?



2 Complète ces égalités.

4 kg = g

3 kg = g

2 kg 200 g =g

1 kg 125 g = g

7 kg 500 g =g

10 kg = g

20 kg =g

100 kg = g

3 500 g = kg..... g

1 500 g = kg..... g

7 250 g = kg..... g

1 990 g = kg..... g

3 Range ces masses de la plus légère à la plus lourde.

2 kg	1 kg 250 g	760 g	3 kg 500 g
950 g	2 kg 910 g	3 kg	

la plus légère

la plus lourde