

Prénom : \_\_\_\_\_ Date : \_\_\_\_\_

**1. Complète**

$300 = 100 + 100 + \underline{\hspace{2cm}}$

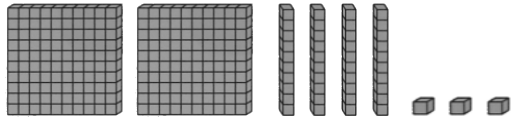
$\underline{\hspace{2cm}} = 100 + 100$

$\underline{\hspace{2cm}} = 100 + 100 + 100 + 100 + 100 + 100$

$800 = 100 + 100 + \underline{\hspace{4cm}}$

$1000 = 100 + 100 + 100 + \underline{\hspace{4cm}}$

**2. Complète comme dans l'exemple.**

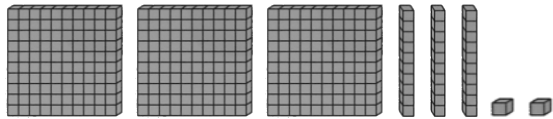


$= 100 + 100) + (10 + 10 + 10 + 10) + (1 + 1 + 1)$

$= 200 + 40 + 3$

$= 243$

C	D	U
2	4	3




$= \underline{\hspace{4cm}}$

$= \underline{\hspace{4cm}}$

$= \underline{\hspace{4cm}}$

C	D	U



$= \underline{\hspace{4cm}}$

$= \underline{\hspace{4cm}}$

$= \underline{\hspace{4cm}}$

C	D	U

Prénom : \_\_\_\_\_ Date : \_\_\_\_\_

**1. Complète**

$300 = 100 + 100 + \underline{\hspace{2cm}}$

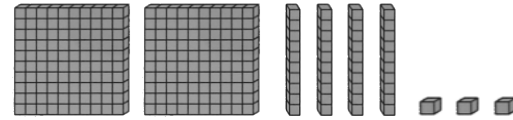
$\underline{\hspace{2cm}} = 100 + 100$

$\underline{\hspace{2cm}} = 100 + 100 + 100 + 100 + 100 + 100$

$800 = 100 + 100 + \underline{\hspace{4cm}}$

$1000 = 100 + 100 + 100 + \underline{\hspace{4cm}}$

**2. Complète comme dans l'exemple.**




$= 100 + 100) + (10 + 10 + 10 + 10) + (1 + 1 + 1)$

$= 200 + 40 + 3$

$= 243$

C	D	U
2	4	3




$= \underline{\hspace{4cm}}$

$= \underline{\hspace{4cm}}$

$= \underline{\hspace{4cm}}$

C	D	U



$= \underline{\hspace{4cm}}$

$= \underline{\hspace{4cm}}$

$= \underline{\hspace{4cm}}$

C	D	U