

LORE L'HEURE ET DEMI




Dessine la petite aiguille en *vert* → et la grande en *rouge* →




3 heures 30



7 h $\frac{1}{2}$




11 heures 30



1 heures 30




4 h $\frac{1}{2}$



2 heures 30




5 h $\frac{1}{2}$



9 h $\frac{1}{2}$




10 heures 30



12 heures 30



6 heures 30



8 h $\frac{1}{2}$

LORE L'HEURE ET DEMI



Dessine la petite aiguille en *vert* → et la grande en *rouge* →




13 heures 30



17 h $\frac{1}{2}$



21 heures 30




23 heures 30




14 h $\frac{1}{2}$




00 heures




15 h $\frac{1}{2}$



19 h $\frac{1}{2}$




22 heures



20 heures



16 heures



18 h $\frac{1}{2}$