

-Nom :

Date :

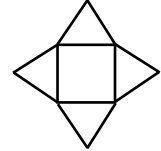
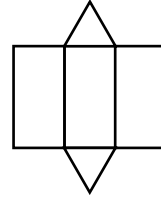
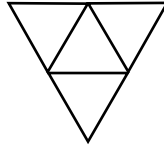
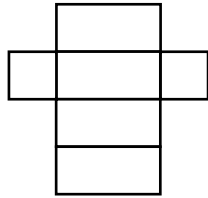
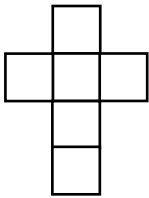
Evaluation

Les patrons de solides

/20

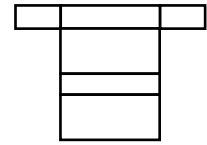
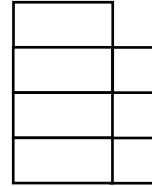
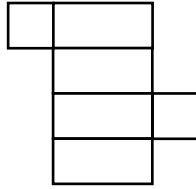
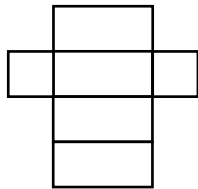
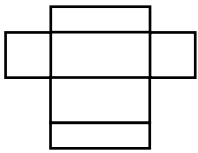
A	RF	RR	NA

/5 1 A quels solides correspondent ces patrons ?




.....

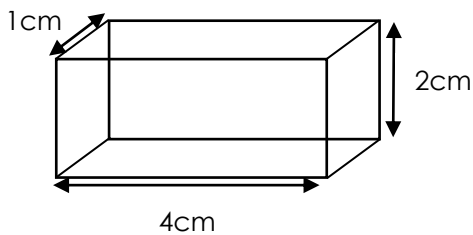
/5 2 Colorie les patrons qui permettent de construire un pavé droit.



/5 3 Dessine 3 patrons de cube différents.



/5 4 Dessine le patron du pavé droit suivant :



Nom :

Date :

Corrigé

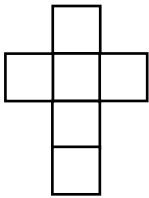
Les patrons de solides

/20

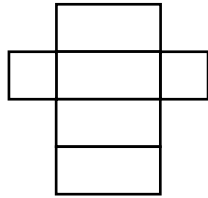
A	RF	RR	NA

/5

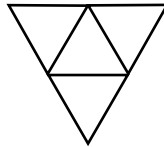
1 A quels solides correspondent ces patrons ?



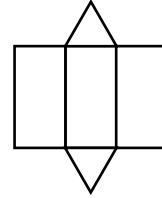
cube



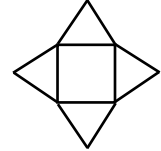
pavé droit



tétraèdre



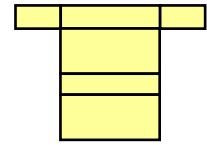
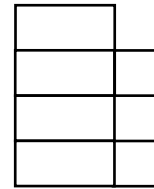
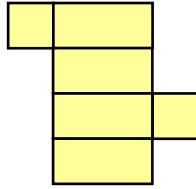
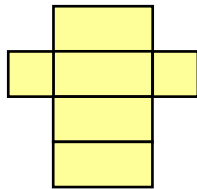
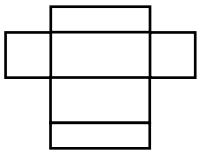
prisme



pyramide

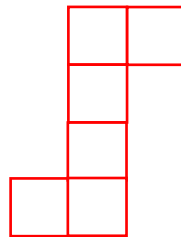


/5

2 Colorie les patrons qui permettent de construire un pavé droit.



/5

3 Dessine 3 patrons de cube différents.



/5

4 Dessine le patron du pavé droit suivant :

