





Retrouve les 4 opérations liant ces nombres.



___	+	___	=	___
___	+	___	=	___
___	-	___	=	___
___	-	___	=	___




Retrouve les 4 opérations liant ces nombres.



___	+	___	=	___
___	+	___	=	___
___	-	___	=	___
___	-	___	=	___




Retrouve les 4 opérations liant ces nombres.



___	+	___	=	___
___	+	___	=	___
___	-	___	=	___
___	-	___	=	___




Retrouve les 4 opérations liant ces nombres.



___	+	___	=	___
___	+	___	=	___
___	-	___	=	___
___	-	___	=	___




Retrouve les 4 opérations liant ces nombres.



___	+	___	=	___
___	+	___	=	___
___	-	___	=	___
___	-	___	=	___




Retrouve les 4 opérations liant ces nombres.



___	+	___	=	___
___	+	___	=	___
___	-	___	=	___
___	-	___	=	___




Retrouve les 4 opérations liant ces nombres.



___	+	___	=	___
___	+	___	=	___
___	-	___	=	___
___	-	___	=	___




Retrouve les 4 opérations liant ces nombres.



___	+	___	=	___
___	+	___	=	___
___	-	___	=	___
___	-	___	=	___




Retrouve les 4 opérations liant ces nombres.



___	+	___	=	___
___	+	___	=	___
___	-	___	=	___
___	-	___	=	___




Retrouve les 4 opérations liant ces nombres.



___	+	___	=	___
___	+	___	=	___
___	-	___	=	___
___	-	___	=	___




Retrouve les 4 opérations liant ces nombres.



___	+	___	=	___
___	+	___	=	___
___	-	___	=	___
___	-	___	=	___




Retrouve les 4 opérations liant ces nombres.



___	+	___	=	___
___	+	___	=	___
___	-	___	=	___
___	-	___	=	___




Retrouve les 4 opérations liant ces nombres.



___	+	___	=	___
___	+	___	=	___
___	-	___	=	___
___	-	___	=	___




Retrouve les 4 opérations liant ces nombres.



___	+	___	=	___
___	+	___	=	___
___	-	___	=	___
___	-	___	=	___




Retrouve les 4 opérations liant ces nombres.



___	+	___	=	___
___	+	___	=	___
___	-	___	=	___
___	-	___	=	___




Retrouve les 4 opérations liant ces nombres.



___	+	___	=	___
___	+	___	=	___
___	-	___	=	___
___	-	___	=	___




Retrouve les 4 opérations liant ces nombres.



___	+	___	=	___
___	+	___	=	___
___	-	___	=	___
___	-	___	=	___




Retrouve les 4 opérations liant ces nombres.



___	+	___	=	___
___	+	___	=	___
___	-	___	=	___
___	-	___	=	___




Retrouve les 4 opérations liant ces nombres.



___	+	___	=	___
___	+	___	=	___
___	-	___	=	___
___	-	___	=	___




Retrouve les 4 opérations liant ces nombres.



___	+	___	=	___
___	+	___	=	___
___	-	___	=	___
___	-	___	=	___




Retrouve les 4 opérations liant ces nombres.



___	+	___	=	___
___	+	___	=	___
___	-	___	=	___
___	-	___	=	___




Retrouve les 4 opérations liant ces nombres.



___	+	___	=	___
___	+	___	=	___
___	-	___	=	___
___	-	___	=	___




Retrouve les 4 opérations liant ces nombres.



___	+	___	=	___
___	+	___	=	___
___	-	___	=	___
___	-	___	=	___



Retrouve les 4 opérations liant ces nombres.



___	+	___	=	___
___	+	___	=	___
___	-	___	=	___
___	-	___	=	___