


1. **Résous** ce problème de fraction

Reproduis cette tablette de chocolat sur ton cahier.

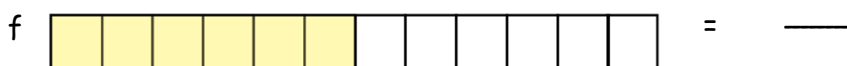
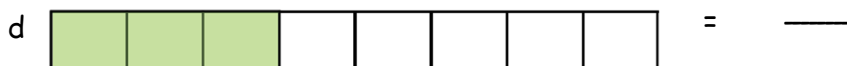
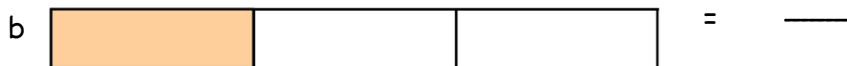

Paul a pris $\frac{6}{24}$ des carrés. Colorie sa portion en bleu. Jeanne en a pris deux fois plus que Paul. Colorie sa portion en vert et écris la fraction qui correspond.

Quelle fraction de la tablette reste-t-il ?

2. **Observe** la bande unité ci-dessous.



On a partagé cette unité de plusieurs manières. Écris le nom de chaque fraction colorée.

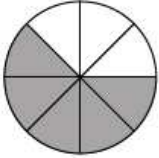
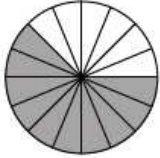
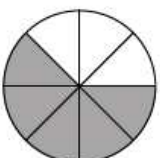
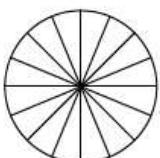
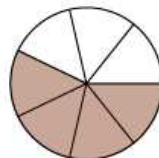
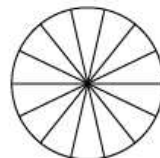
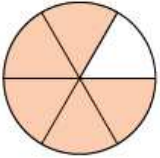
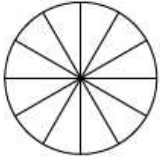
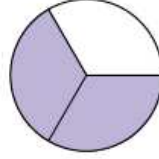
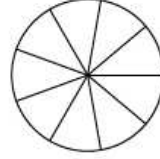
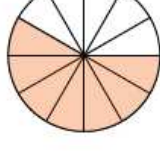



Quelles fractions sont équivalentes ? _____

3. **Complète** chaque égalité pour trouver des fractions équivalentes.

<p>1) $\frac{1}{2} = \frac{\quad}{4}$</p>	<p>2) $\frac{1}{2} = \frac{\quad}{6}$</p>
<p>3) $\frac{1}{3} = \frac{\quad}{6}$</p>	<p>4) $\frac{1}{4} = \frac{\quad}{8}$</p>
<p>5) $\frac{1}{5} = \frac{\quad}{10}$</p>	<p>6) $\frac{1}{6} = \frac{\quad}{12}$</p>
<p>7) $\frac{2}{2} = \frac{\quad}{4}$ 8) $\frac{3}{4} = \frac{\quad}{8}$ 9) $\frac{2}{3} = \frac{\quad}{6}$ 10) $\frac{2}{5} = \frac{\quad}{10}$</p>	
<p>11) $\frac{3}{3} = \frac{\quad}{6}$ 12) $\frac{4}{6} = \frac{\quad}{12}$ 13) $\frac{4}{5} = \frac{\quad}{10}$ 14) $\frac{5}{6} = \frac{\quad}{12}$</p>	

1. **Colorie** la deuxième fraction pour obtenir une fraction équivalente.

	=		$\frac{5}{8} = \frac{10}{16}$		=		--- = ---
	=		--- = ---		=		--- = ---
	=		--- = ---		=		--- = ---

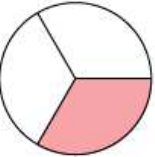
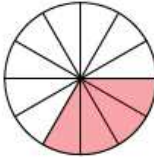
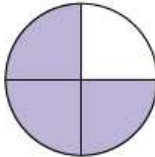
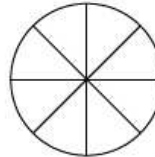
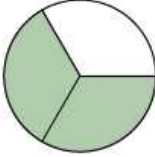
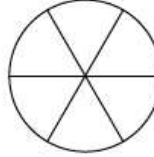
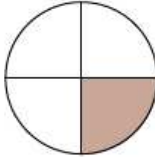
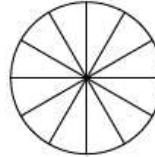
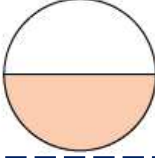
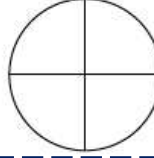
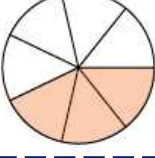
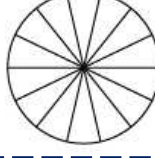
2. **Entoure les couples de fractions équivalentes**

$\frac{3}{4} \dots \frac{6}{8}$	$\frac{3}{5} \dots \frac{9}{10}$	$\frac{1}{2} \dots \frac{4}{9}$	$\frac{1}{3} \dots \frac{5}{15}$	$\frac{6}{7} \dots \frac{18}{21}$
$\frac{5}{3} \dots \frac{10}{9}$	$\frac{4}{3} \dots \frac{16}{12}$	$\frac{3}{5} \dots \frac{6}{10}$	$\frac{5}{2} \dots \frac{15}{4}$	$\frac{4}{12} \dots \frac{16}{48}$

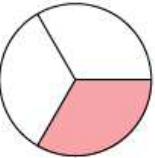
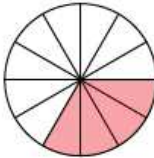
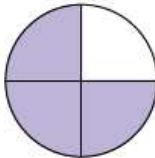
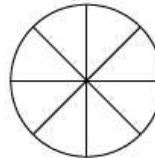
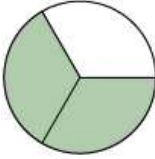
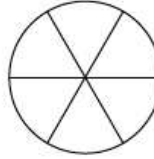
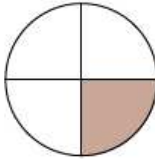
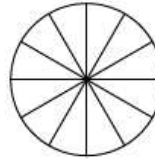
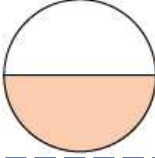
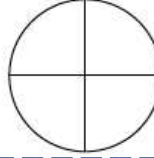
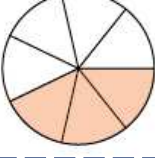
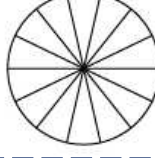
3. **Trouvez le nombre manquant dans chaque équivalence ci-dessous.**

$\frac{\text{■}}{5} = \frac{6}{10}$	$\frac{2}{\text{■}} = \frac{4}{8}$	$\frac{1}{2} = \frac{5}{\text{■}}$	$\frac{2}{11} = \frac{\text{■}}{33}$
$\frac{\text{■}}{11} = \frac{36}{44}$	$\frac{\text{■}}{3} = \frac{5}{15}$	$\frac{1}{2} = \frac{3}{\text{■}}$	$\frac{\text{■}}{5} = \frac{2}{10}$
$\frac{1}{2} = \frac{3}{\text{■}}$	$\frac{1}{11} = \frac{2}{\text{■}}$	$\frac{5}{8} = \frac{\text{■}}{16}$	$\frac{\text{■}}{9} = \frac{32}{36}$

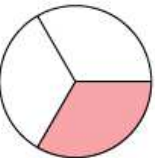
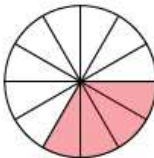
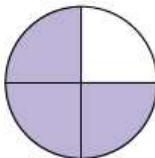
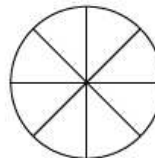
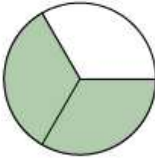
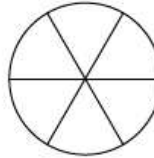
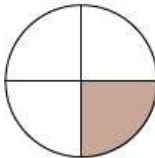
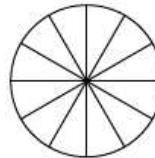
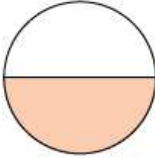
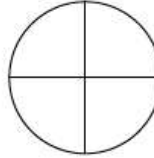
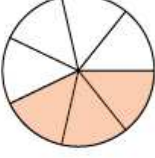
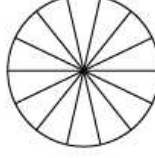
Colorie la deuxième fraction pour obtenir une fraction équivalente.

	=		$\frac{1}{3} = \frac{4}{12}$		=		-- = --
	=		-- = --		=		-- = --
	=		-- = --		=		-- = --

Colorie la deuxième fraction pour obtenir une fraction équivalente.

	=		$\frac{1}{3} = \frac{4}{12}$		=		-- = --
	=		-- = --		=		-- = --
	=		-- = --		=		-- = --

Colorie la deuxième fraction pour obtenir une fraction équivalente.

	=		$\frac{1}{3} = \frac{4}{12}$		=		-- = --
	=		-- = --		=		-- = --
	=		-- = --		=		-- = --

Entoure les couples de fractions équivalentes

$\frac{1}{4} \dots \frac{6}{24}$

$\frac{1}{5} \dots \frac{4}{15}$

$\frac{1}{3} \dots \frac{4}{9}$

$\frac{3}{6} \dots \frac{9}{18}$

$\frac{2}{7} \dots \frac{6}{21}$

Entoure les couples de fractions équivalentes

$\frac{1}{4} \dots \frac{6}{24}$

$\frac{1}{5} \dots \frac{4}{15}$

$\frac{1}{3} \dots \frac{4}{9}$

$\frac{3}{6} \dots \frac{9}{18}$

$\frac{2}{7} \dots \frac{6}{21}$

Entoure les couples de fractions équivalentes

$\frac{1}{4} \dots \frac{6}{24}$

$\frac{1}{5} \dots \frac{4}{15}$

$\frac{1}{3} \dots \frac{4}{9}$

$\frac{3}{6} \dots \frac{9}{18}$

$\frac{2}{7} \dots \frac{6}{21}$

Entoure les couples de fractions équivalentes

$\frac{1}{4} \dots \frac{6}{24}$

$\frac{1}{5} \dots \frac{4}{15}$

$\frac{1}{3} \dots \frac{4}{9}$

$\frac{3}{6} \dots \frac{9}{18}$

$\frac{2}{7} \dots \frac{6}{21}$

Entoure les couples de fractions équivalentes

$\frac{1}{4} \dots \frac{6}{24}$

$\frac{1}{5} \dots \frac{4}{15}$

$\frac{1}{3} \dots \frac{4}{9}$

$\frac{3}{6} \dots \frac{9}{18}$

$\frac{2}{7} \dots \frac{6}{21}$

Entoure les couples de fractions équivalentes

$\frac{1}{4} \dots \frac{6}{24}$

$\frac{1}{5} \dots \frac{4}{15}$

$\frac{1}{3} \dots \frac{4}{9}$

$\frac{3}{6} \dots \frac{9}{18}$

$\frac{2}{7} \dots \frac{6}{21}$

Entoure les couples de fractions équivalentes

$\frac{1}{4} \dots \frac{6}{24}$

$\frac{1}{5} \dots \frac{4}{15}$

$\frac{1}{3} \dots \frac{4}{9}$

$\frac{3}{6} \dots \frac{9}{18}$

$\frac{2}{7} \dots \frac{6}{21}$

Entoure les couples de fractions équivalentes

$\frac{1}{4} \dots \frac{6}{24}$

$\frac{1}{5} \dots \frac{4}{15}$

$\frac{1}{3} \dots \frac{4}{9}$

$\frac{3}{6} \dots \frac{9}{18}$

$\frac{2}{7} \dots \frac{6}{21}$

Entoure les couples de fractions équivalentes

$\frac{1}{4} \dots \frac{6}{24}$

$\frac{1}{5} \dots \frac{4}{15}$

$\frac{1}{3} \dots \frac{4}{9}$

$\frac{3}{6} \dots \frac{9}{18}$

$\frac{2}{7} \dots \frac{6}{21}$