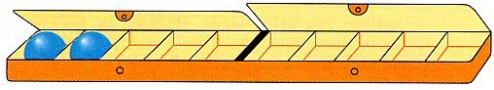
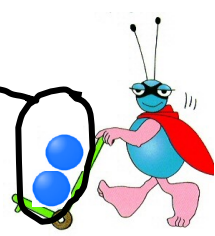
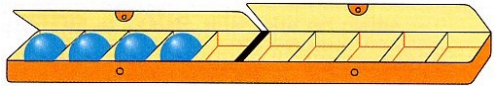



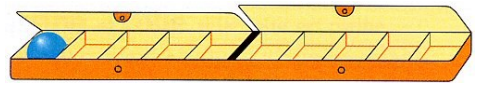
1 2 3 4 complète l'égalité



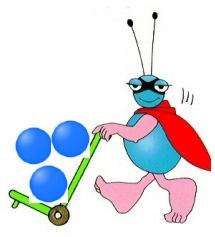
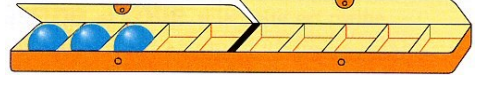
$2 + =$


$+ =$

$+ =$


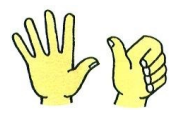
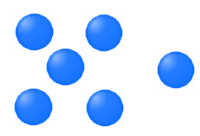
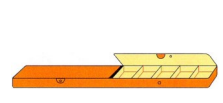



$+ =$

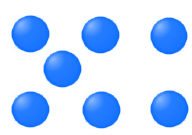
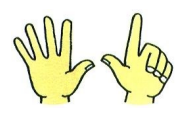
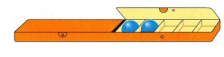



entoure Entoure et barre barre

6



7



Réponds



Dédé a  voitures



Gladys a  camion

Calcule : ..... + ..... = .....

Ensemble ils ont  véhicules

Réponds



Perrine a  tulipes



Mathilde a  roses

Calcule : ..... + ..... = .....

Ensemble elles ont  fleurs



Ecris

6