


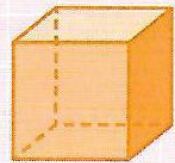
# LES SOLIDES

## Je retiens

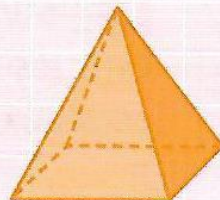
→ Un **solide** est un objet en volume.




pavé droit



cube




pyramide



cylindre

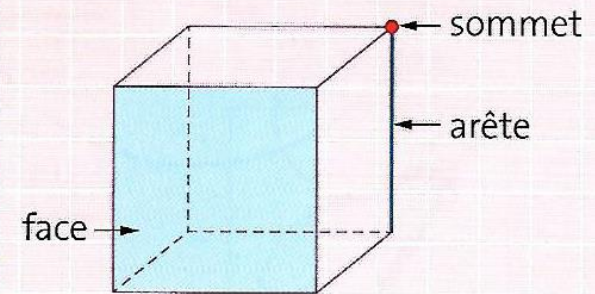


cône



boule

→ Un solide peut avoir des **arêtes**, des **faces** et des **sommets**.



cube