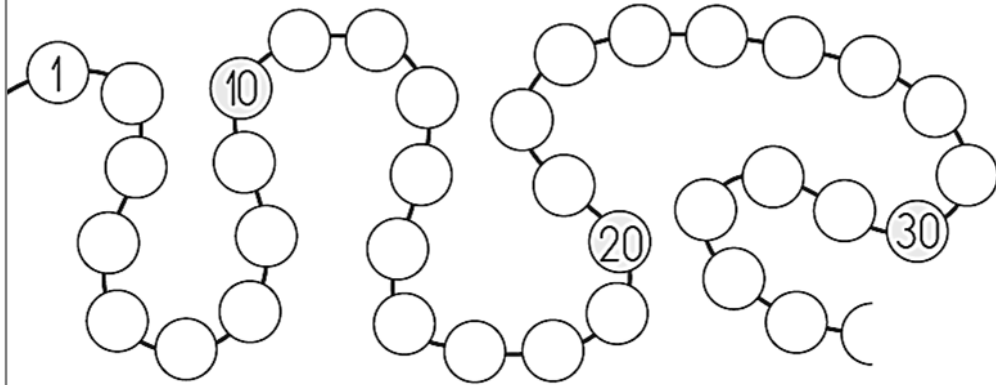




Ecris chaque nombre à sa place :

U 4-3

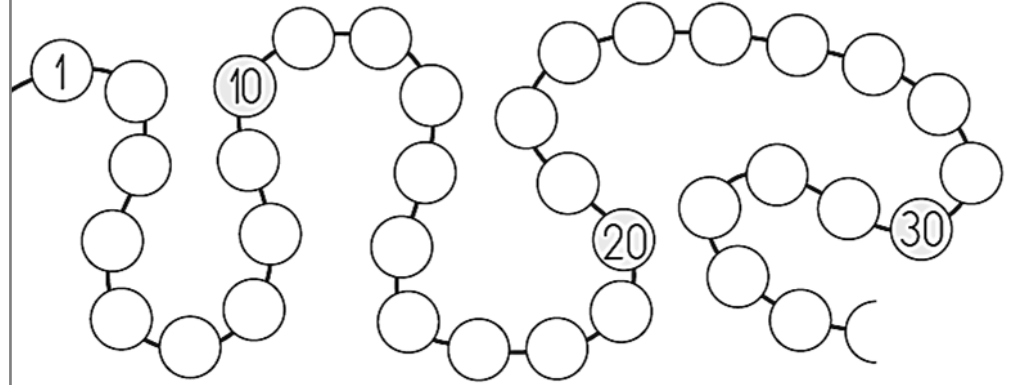
24 - 31 - 8 - 15 - 27 - 12



Ecris chaque nombre à sa place :

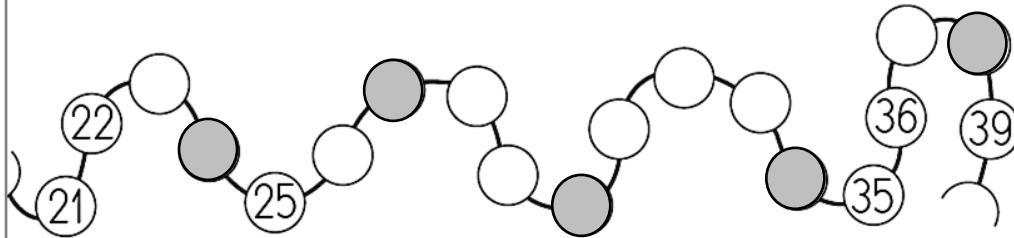
U 4-3

24 - 31 - 8 - 15 - 27 - 12



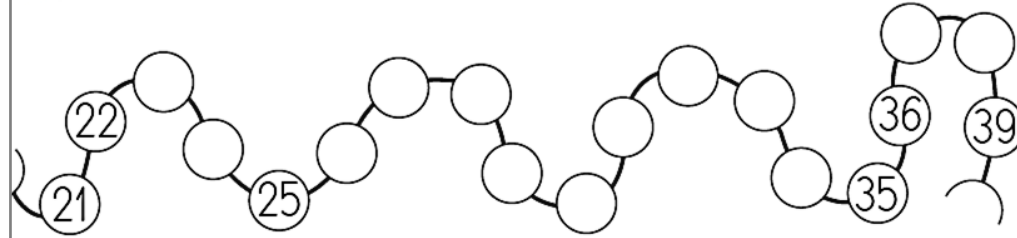
Ecris les bons nombres dans les cases grises

U 4-4



Ecris les bons nombres dans les cases grises

U 4-4




Complète de différentes façons.

U 4-1

$$\begin{array}{l} \dots + \dots = 5 \\ \dots + \dots = 5 \\ \dots + \dots = 5 \end{array}$$

$$\begin{array}{l} \dots - \dots = 3 \\ \dots - \dots = 3 \\ \dots - \dots = 3 \end{array}$$



Complète de différentes façons.

U 4-1

$$\begin{array}{l} \dots + \dots = \square \\ \dots + \dots = \square \\ \dots + \dots = \square \end{array}$$

$$\begin{array}{l} \dots - \dots = \square \\ \dots - \dots = \square \\ \dots - \dots = \square \end{array}$$

