



**Calcule**

$8 + 4 = \dots\dots\dots$

$18 + 4 = \dots\dots\dots$

$38 + 4 = \dots\dots\dots$


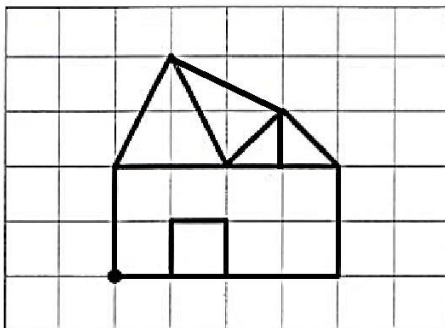
$12 - 9 = \dots\dots\dots$

$42 - 9 = \dots\dots\dots$

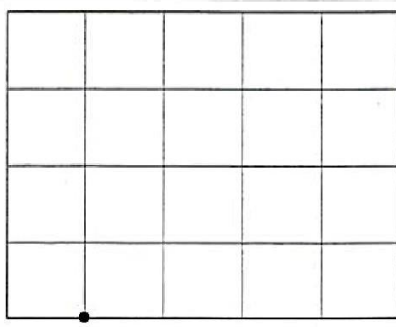
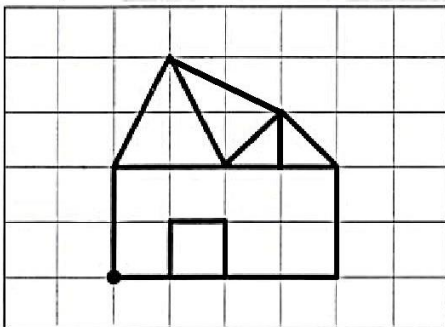
$62 - 9 = \dots\dots\dots$

**Reproduis cette figure**

Reproduis la maison



Agrandis la maison



**Calcule**

$8 + 4 = \dots\dots\dots$

$18 + 4 = \dots\dots\dots$

$38 + 4 = \dots\dots\dots$


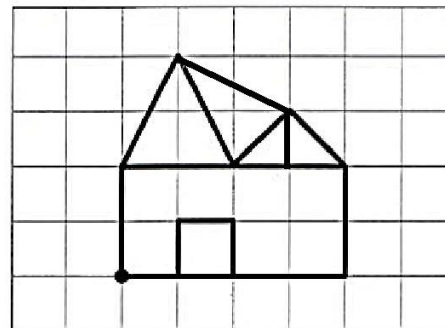
$12 - 9 = \dots\dots\dots$

$42 - 9 = \dots\dots\dots$

$62 - 9 = \dots\dots\dots$

**Reproduis cette figure**

Reproduis la maison



Agrandis la maison

