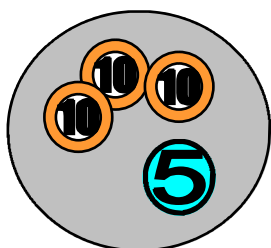
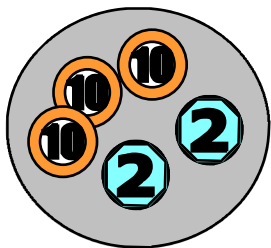


Il y a F

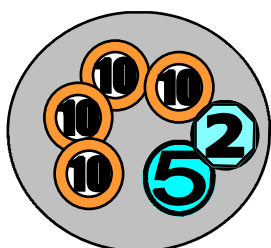


Il y a F

Combien d'argent dans les 2 porte-monnaie ensemble ?



Il y a F



Il y a F

Combien d'argent dans les 2 porte-monnaie ensemble ?