

Prénom: _____

Numération

Date: _____

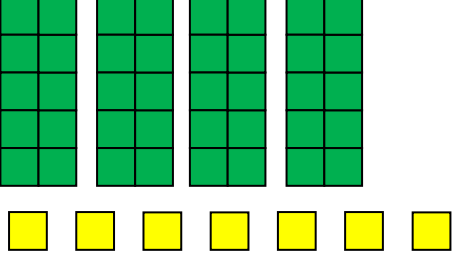
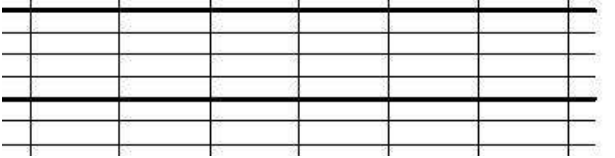
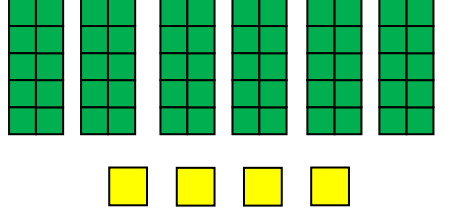
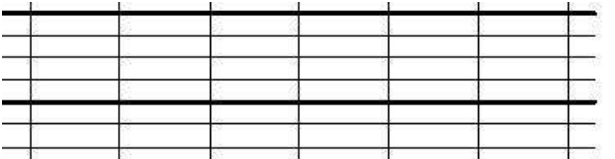
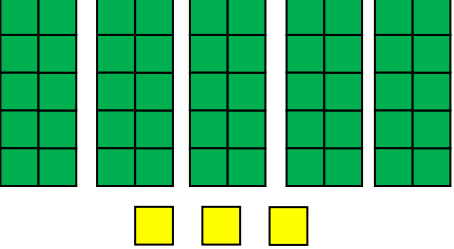

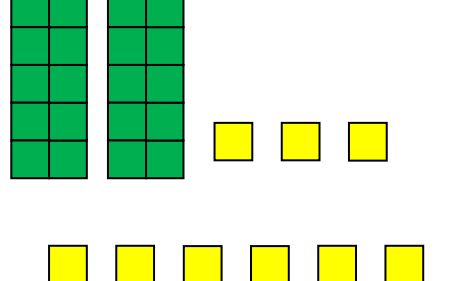

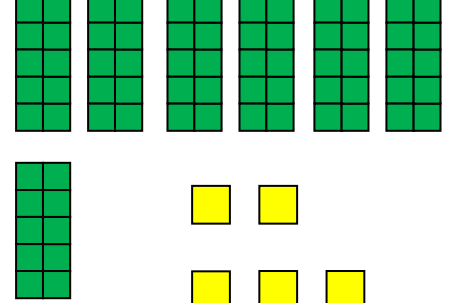
Complète le tableau.

<p>* * * * * * * * * * * * * * * * * *</p> <p>* * * * * * * * * * * * * * * * *</p>	dizaines	unités	
<p>§ § § § § § § § § § § § § § § § § §</p> <p>§ § § § § § § § § § § §</p>	dizaines	unités	
<p>μ μ μ μ μ μ μ μ μ μ μ μ μ μ μ</p> <p>μ μ μ μ μ μ μ μ μ μ μ μ μ μ μ</p> <p>μ μ μ μ μ μ μ μ μ μ μ μ μ μ μ</p>	dizaines	unités	
<p>⊙ ⊙ ⊙ ⊙ ⊙ ⊙ ⊙ ⊙ ⊙</p>	dizaines	unités	
<p>Ж Ж Ж Ж Ж Ж Ж Ж Ж Ж Ж Ж Ж Ж</p> <p>Ж Ж Ж Ж Ж Ж Ж Ж Ж Ж Ж Ж Ж Ж</p> <p>Ж Ж Ж Ж Ж Ж Ж Ж Ж Ж Ж Ж Ж Ж</p> <p>Ж Ж Ж Ж Ж Ж Ж Ж Ж Ж Ж Ж</p>	dizaines	unités	

Prénom: _____

Date: _____

Colorie le bon nombre et écris-le en lettres.

	<div data-bbox="576 414 703 526">11</div> <div data-bbox="756 414 884 526">74</div> <div data-bbox="660 555 788 672">47</div>	
	<div data-bbox="576 761 703 873">10</div> <div data-bbox="756 761 884 873">64</div> <div data-bbox="660 902 788 1019">46</div>	
	<div data-bbox="576 1108 703 1220">53</div> <div data-bbox="756 1108 884 1220">8</div> <div data-bbox="660 1249 788 1366">35</div>	
	<div data-bbox="576 1456 703 1579">29</div> <div data-bbox="756 1456 884 1579">11</div> <div data-bbox="660 1612 788 1729">19</div>	
	<div data-bbox="576 1803 703 1926">65</div> <div data-bbox="756 1803 884 1926">12</div> <div data-bbox="660 1960 788 2076">75</div>	