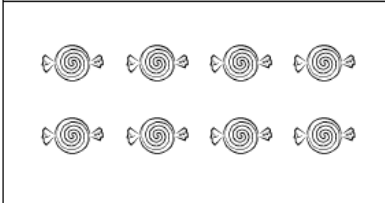

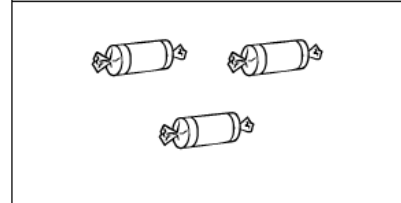
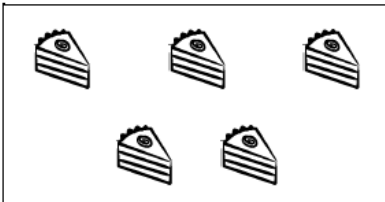
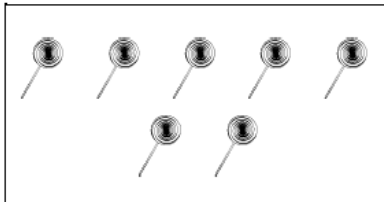



Prénom: _____

Calcul

Date: _____

1- Barre les objets pour résoudre les soustractions.


$$8 - 2 = \underline{\quad}$$

$$6 - 3 = \underline{\quad}$$

$$3 - 2 = \underline{\quad}$$

$$5 - 3 = \underline{\quad}$$

$$7 - 5 = \underline{\quad}$$

$$10 - 7 = \underline{\quad}$$

2- Ecris le bon résultat dans la case. (Fais bien attention au signe!)

$$\boxed{4} + \boxed{2} = \boxed{\quad}$$

$$\boxed{3} + \boxed{4} = \boxed{\quad}$$

$$\boxed{5} + \boxed{3} = \boxed{\quad}$$

$$\boxed{6} + \boxed{1} = \boxed{\quad}$$

$$\boxed{3} + \boxed{3} = \boxed{\quad}$$

$$\boxed{2} + \boxed{3} = \boxed{\quad}$$

$$\boxed{4} + \boxed{3} = \boxed{\quad}$$

$$\boxed{7} + \boxed{1} = \boxed{\quad}$$

$$\boxed{2} + \boxed{4} = \boxed{\quad}$$

$$\boxed{4} + \boxed{4} = \boxed{\quad}$$

Prénom: _____

Calcul

Date: _____

Ecris le résultat de ces opérations.

$4 + 2 = \underline{\quad}$

$4 + 0 = \underline{\quad}$

$3 + 5 = \underline{\quad}$

$7 + 1 = \underline{\quad}$

$1 + 6 = \underline{\quad}$

$3 + 0 = \underline{\quad}$

$4 + 3 = \underline{\quad}$

$5 + 4 = \underline{\quad}$

Ecris le résultat de ces opérations.

$4 - 2 = \underline{\quad}$

$4 - 0 = \underline{\quad}$

$5 - 3 = \underline{\quad}$

$7 - 1 = \underline{\quad}$

$6 - 1 = \underline{\quad}$

$3 - 0 = \underline{\quad}$

$4 - 3 = \underline{\quad}$

$5 - 4 = \underline{\quad}$

Prénom: _____

Calcul

Date: _____

Ecris le résultat de ces opérations.

$4 + 2 = \underline{\quad}$

$4 + 0 = \underline{\quad}$

$3 + 5 = \underline{\quad}$

$7 + 1 = \underline{\quad}$

$1 + 6 = \underline{\quad}$

$3 + 0 = \underline{\quad}$

$4 + 3 = \underline{\quad}$

$5 + 4 = \underline{\quad}$

Ecris le résultat de ces opérations.

$4 - 2 = \underline{\quad}$

$4 - 0 = \underline{\quad}$

$5 - 3 = \underline{\quad}$

$7 - 1 = \underline{\quad}$

$6 - 1 = \underline{\quad}$

$3 - 0 = \underline{\quad}$

$4 - 3 = \underline{\quad}$

$5 - 4 = \underline{\quad}$

Prénom: _____

Date: _____

Entoure le signe de l'opération puis calcule.

$3 + 4 = \underline{\quad}$	$3 - 2 = \underline{\quad}$
$2 + 2 = \underline{\quad}$	$4 - 1 = \underline{\quad}$
$2 + 6 = \underline{\quad}$	$7 - 0 = \underline{\quad}$
$4 + 3 = \underline{\quad}$	$8 - 2 = \underline{\quad}$
$4 + 1 = \underline{\quad}$	$7 - 5 = \underline{\quad}$
$6 + 3 = \underline{\quad}$	$9 - 2 = \underline{\quad}$

Entoure le signe de l'opération puis calcule.

$9 - 1 = \underline{\quad}$	$3 + 5 = \underline{\quad}$
$2 + 5 = \underline{\quad}$	$4 - 3 = \underline{\quad}$
$2 + 1 = \underline{\quad}$	$2 + 5 = \underline{\quad}$
$4 - 4 = \underline{\quad}$	$5 - 4 = \underline{\quad}$
$2 + 6 = \underline{\quad}$	$3 + 1 = \underline{\quad}$
$8 - 7 = \underline{\quad}$	$8 - 3 = \underline{\quad}$

Prénom: _____

Date: _____

Entoure le signe de l'opération puis calcule.

$3 + 1 = \underline{\quad}$	$3 - 1 = \underline{\quad}$
$2 + 3 = \underline{\quad}$	$4 - 2 = \underline{\quad}$
$2 + 0 = \underline{\quad}$	$2 - 0 = \underline{\quad}$
$4 + 1 = \underline{\quad}$	$5 - 2 = \underline{\quad}$
$4 + 5 = \underline{\quad}$	$7 - 3 = \underline{\quad}$
$6 + 2 = \underline{\quad}$	$9 - 4 = \underline{\quad}$

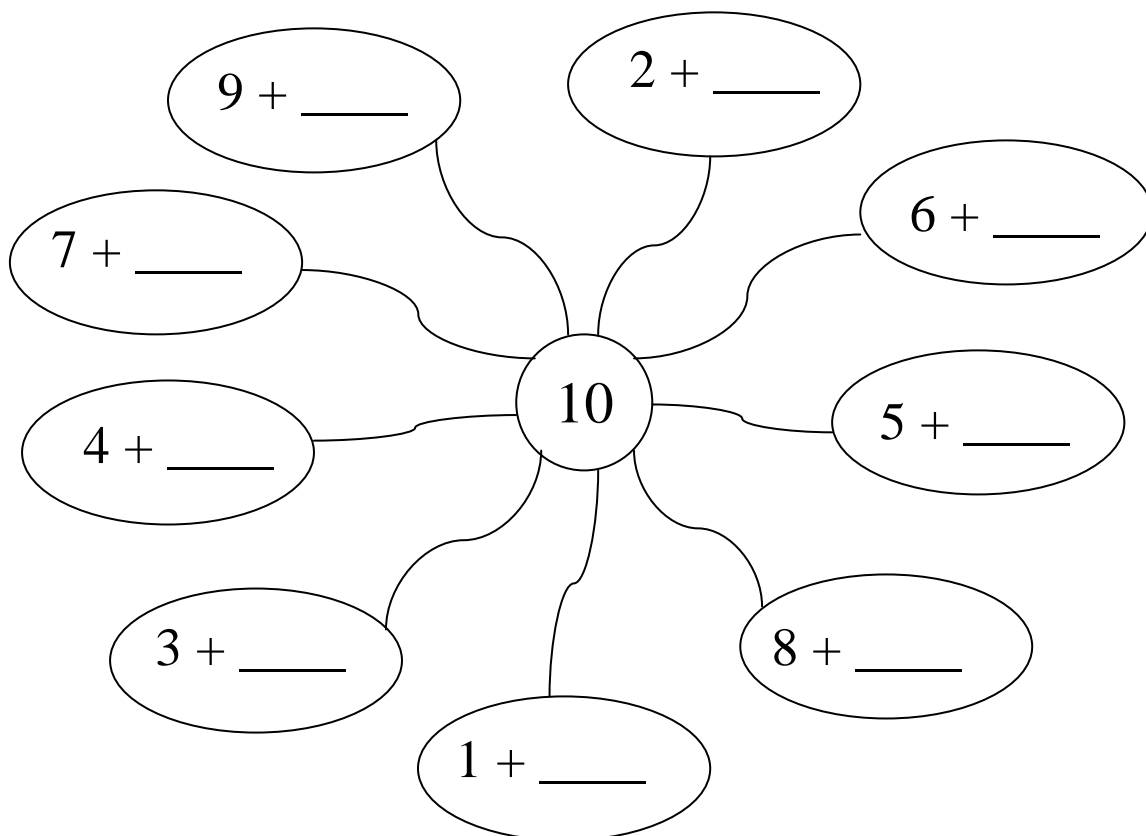
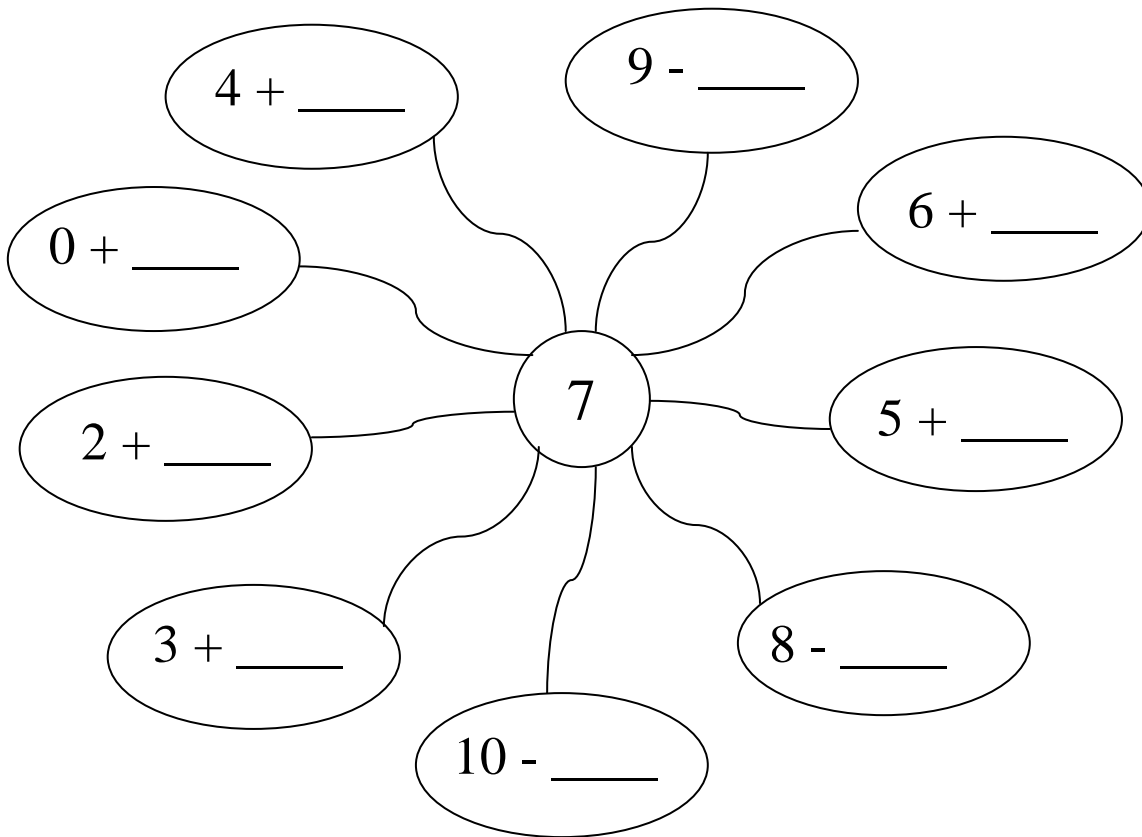
Entoure le signe de l'opération puis calcule.

$3 - 1 = \underline{\quad}$	$3 + 1 = \underline{\quad}$
$2 + 2 = \underline{\quad}$	$4 - 1 = \underline{\quad}$
$2 + 0 = \underline{\quad}$	$2 + 4 = \underline{\quad}$
$4 - 1 = \underline{\quad}$	$5 - 3 = \underline{\quad}$
$2 + 7 = \underline{\quad}$	$3 + 4 = \underline{\quad}$
$8 - 1 = \underline{\quad}$	$8 - 3 = \underline{\quad}$

Prénom: _____

Date: _____

1- Complète ces araignées pour avoir le bon résultat.



Prénom: _____

Date: _____

1- Complète ces tableaux à double entrée.

+	5
2	
4	
6	

+	3
4	
3	
5	

+	7	8
3		
6		

+	4	5
2		
7		

+	3	4	6	2
2				
7				
5				
3				