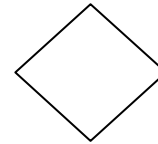
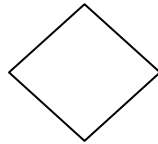
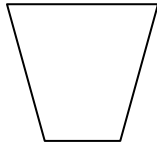
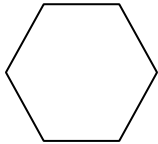




# EVALUATION DE MATHEMATIQUE CP

1ère période



## 1. Dictée de nombres




## 2. Colorie en ORANGE lorsque la boîte a ses 5 jetons, puis écris les égalités et le nombre de jetons en tout



.....+.....



.....+.....



## 3/ Colorie les doigts :

Colorie 8 doigts



Colorie 10 doigts



Colorie 7 doigts



## 4. Calcule:

$2 + 1 = \dots\dots$

$0 + 3 = \dots\dots$

$3 + 2 = \dots\dots$

$2 + 3 = \dots\dots$

$2 + 2 = \dots\dots$

$4 + 1 = \dots\dots$

$1 + 3 = \dots\dots$

$5 + 0 = \dots\dots$

## 5. Calcule :

$2 - 1 = \dots\dots$

$3 - 3 = \dots\dots$

$3 - 2 = \dots\dots$

$5 - 0 = \dots\dots$

$5 - 2 = \dots\dots$

$4 - 1 = \dots\dots$

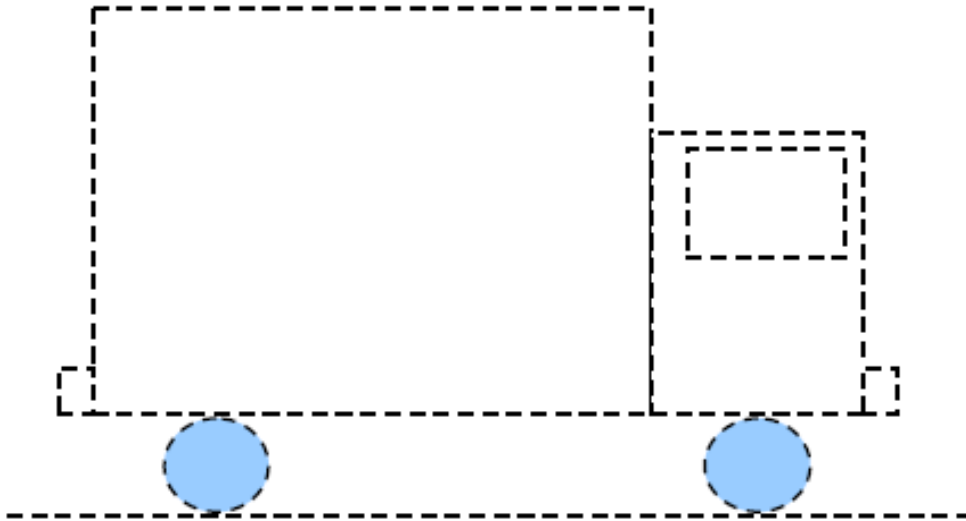
$5 - 3 = \dots\dots$

$3 - 1 = \dots\dots$

# EVALUATION DE géométrie CP

1ère période

1. Avec ton crayon et ta règle, trace le camion:



2. Avec ta règle, complète la toile d'araignée en joignant les points.

