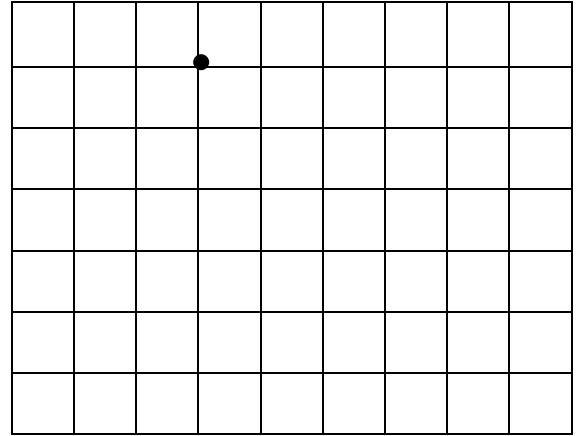
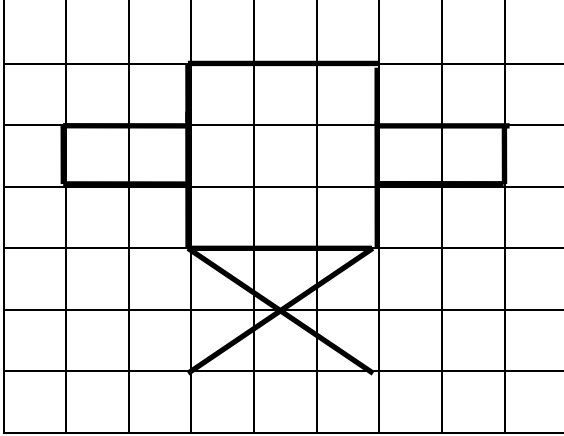


1 Reproduction sur quadrillage

A) Reproduis la figure à partir du point:




2 Tracer et prolonger un segment

A) Trace la suite du rectangle à la règle :



B) Relie les points à la règle :



3 Sommes de deux nombres

A) Relie chaque pomme à son arbre:

Apples: 65, 45, 25, 35, 55

Trees: $20 + 25$, $10 + 15$, $30 + 35$, $10 + 45$, $20 + 15$

4 Compléments à la dizaine

A) Colorie selon la légende indiquée

Legend:

- $? = 5$ (brown box)
- $? = 2$ (grey box)
- $? = 4$ (yellow box)
- $? = 6$ (red box)

Equations on the snail and mushroom:

- Snail shell: $? + 15 = 20$
- Snail body: $? + 8 = 10$
- Mushroom cap: $? + 24 = 30$
- Mushroom stem: $? + 36 = 40$
- Mushroom base: $? + 45 = 50$
- Small mushroom: $? + 16 = 20$
- Small mushroom: $? + 25 = 30$