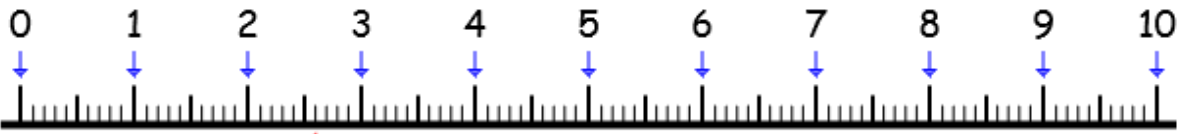
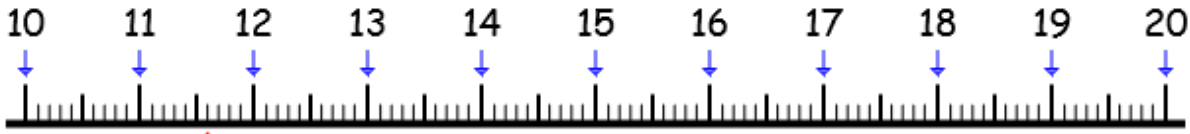


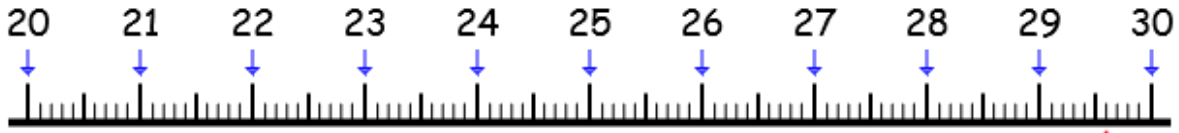
Exercice 1 : Mesure en cm et en mm.



★



★★



★★★★

Exercice 2 : Trace sur ton cahier.

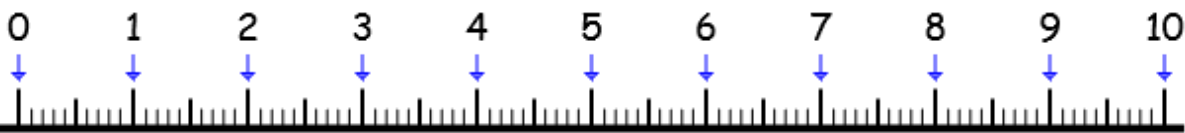
★ Un segment [AB] de 4 cm et 3 mm.

★★ Un segment [CD] de 8 cm et 6 mm.

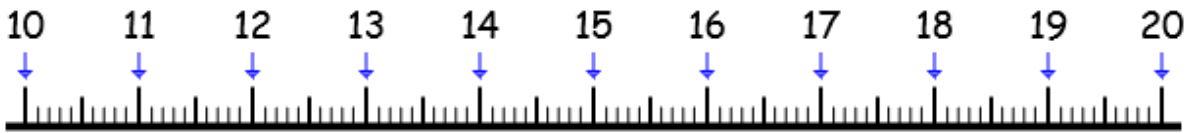
★★★★ Un segment [EF] de 10 cm et 2 mm.

Mémo 9

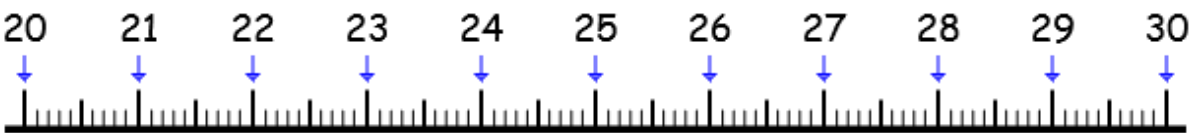
Exercice 1 : Mesure en cm et en mm.



★



★★



★★★★

Exercice 2 : Trace sur ton cahier.

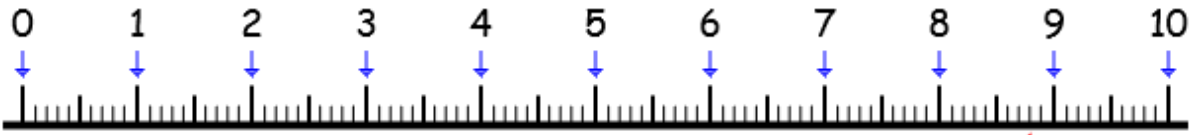
★ Un segment [GH] de 5 cm et 5 mm.

★★ Un segment [IJ] de 12 cm et 8 mm.

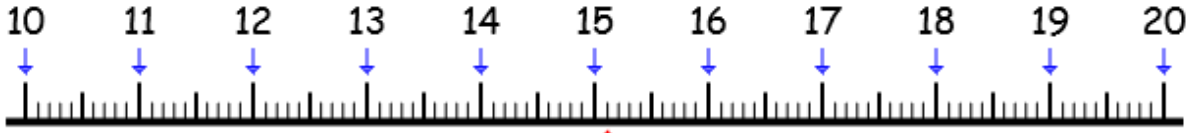
★★★★ Un segment [KL] de 11 cm et 4 mm.

Mémo 9

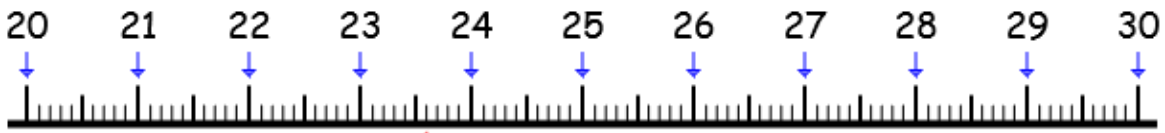
Exercice 1 : Mesure en cm et en mm.



★



★★



★★★★

Exercice 2 : Trace sur ton cahier.

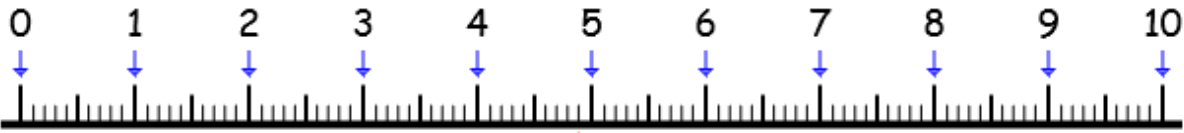
★ Un segment [MN] de 5 cm et 3 mm.

★★ Un segment [OP] de 13 cm et 1 mm.

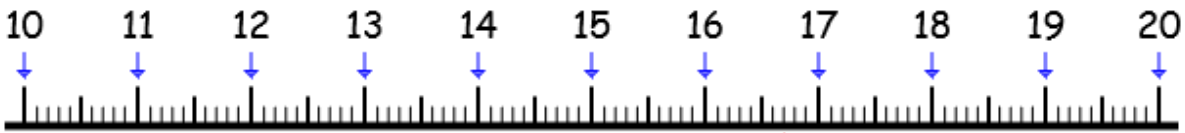
★★★ Un segment [QR] de 15 cm et 6 mm.

Mémo 9

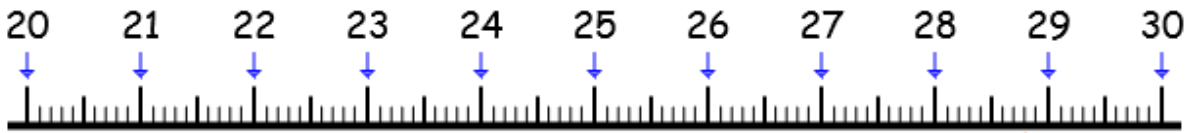
Exercice 1 : Mesure en cm et en mm.



★



★★



★★★★

Exercice 2 : Trace sur ton cahier.

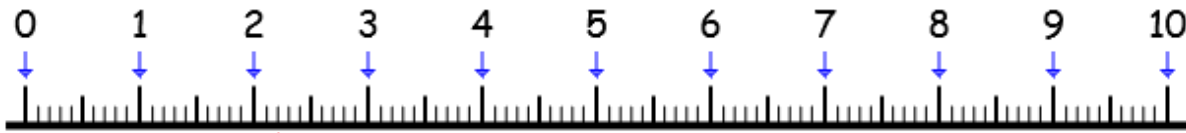
★ Un segment [ST] de 6 cm et 7 mm.

★★ Un segment [UV] de 17 cm et 3 mm.

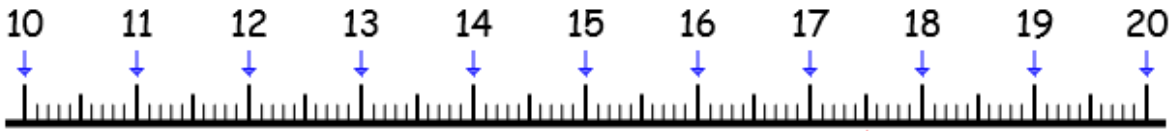
★★★ Un segment [WX] de 4 cm et 9 mm.

Mémo 9

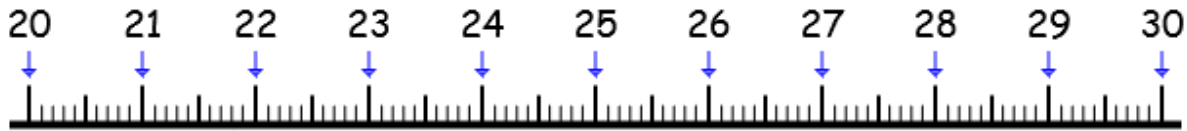
Exercice 1 : Mesure en cm et en mm.



★



★★



★★★★

Exercice 2 : Trace sur ton cahier.

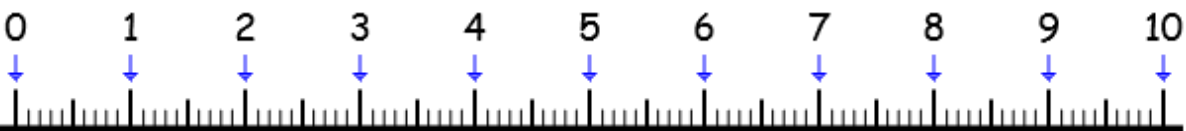
★ Un segment [YZ] de 7 cm et 1 mm.

★★ Un segment [AB] de 2 cm et 6 mm.

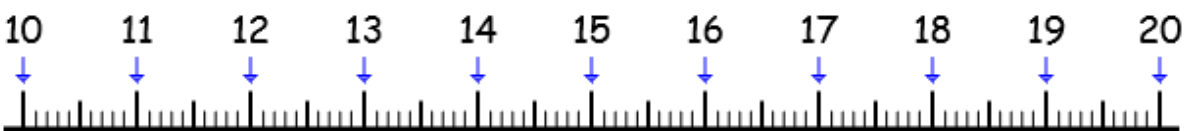
★★★★ Un segment [CD] de 16 cm et 7 mm.

Mémo 9

Exercice 1 : Mesure en cm et en mm.



★



★★



★★★★

Exercice 2 : Trace sur ton cahier.

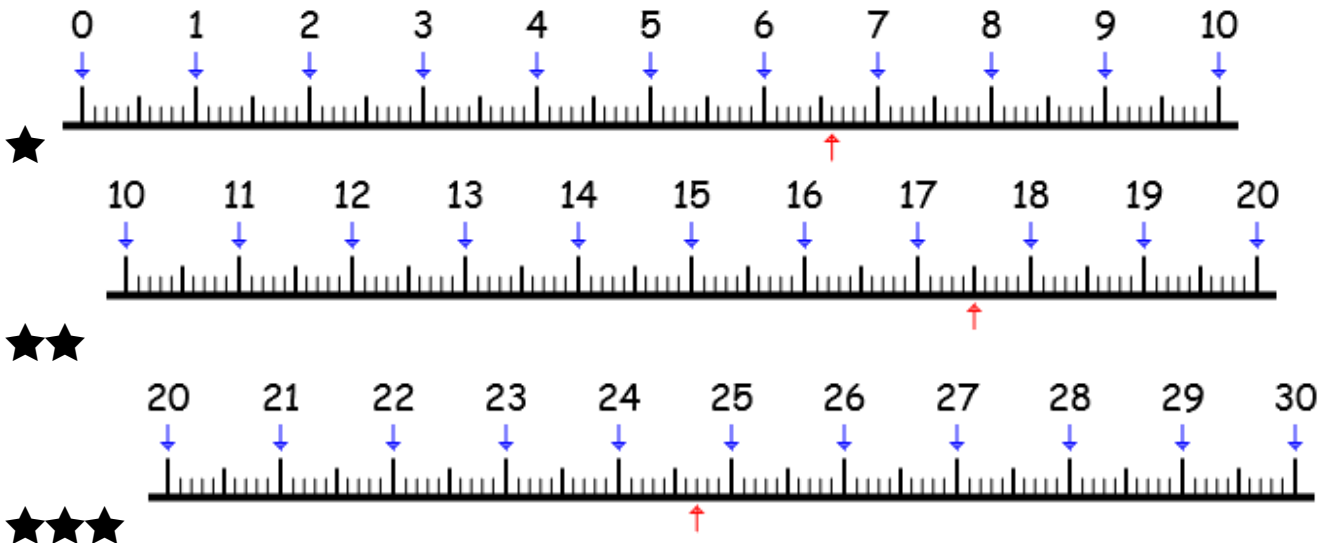
★ Un segment [EF] de 11 cm et 5 mm.

★★ Un segment [GH] de 5 cm et 3 mm.

★★★★ Un segment [IJ] de 9 cm et 7 mm.

Mémo 9

Exercice 1 : Mesure en cm et en mm.

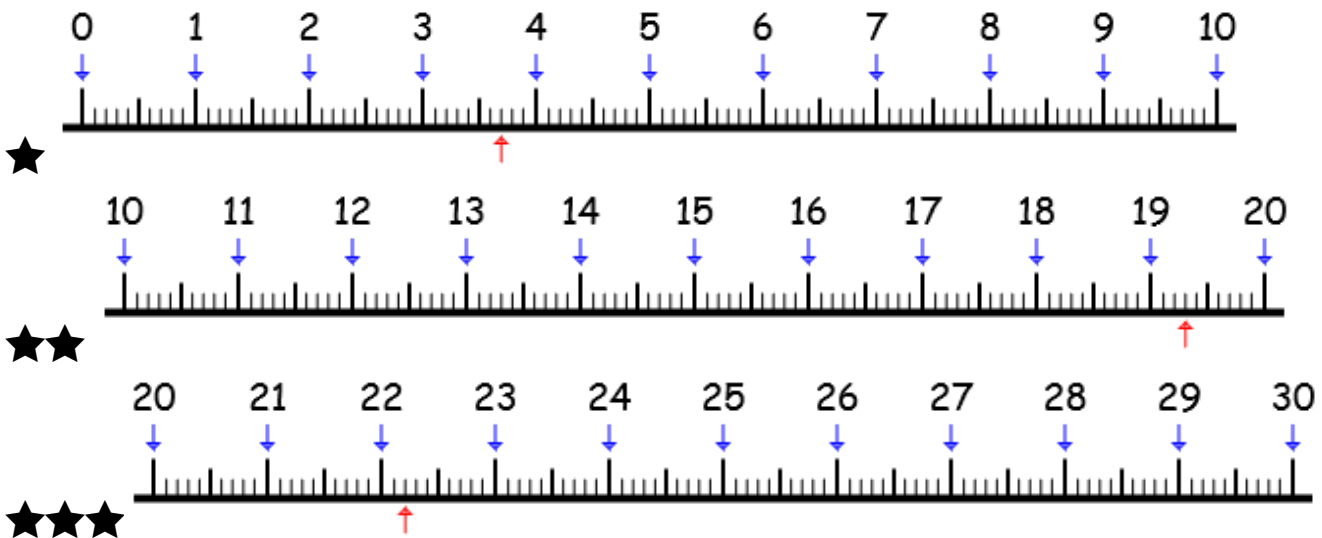


Exercice 2 : Trace sur ton cahier.

- ★ Un segment [KL] de 7 cm et 1 mm.
- ★★ Un segment [MN] de 9 cm et 5 mm.
- ★★★★ Un segment [OP] de 13 cm et 4 mm.

Mémo 9

Exercice 1 : Mesure en cm et en mm.



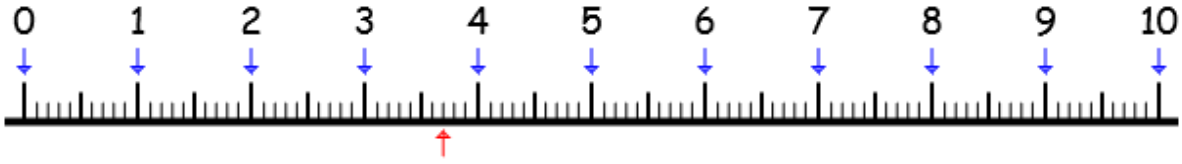
Exercice 2 : Trace sur ton cahier.

- ★ Un segment [QR] de 6 cm et 8 mm.
- ★★ Un segment [ST] de 15 cm et 2 mm.
- ★★★★ Un segment [UV] de 10 cm et 4 mm.

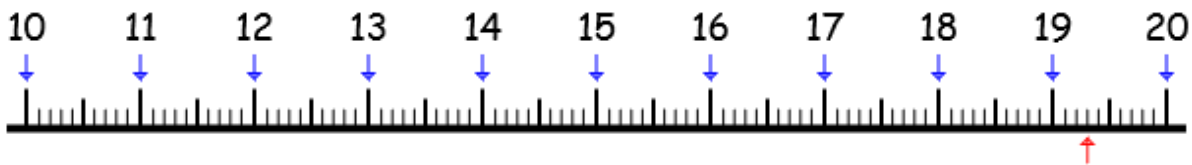
Mémo 9

Compétence : Utiliser le cm et le mm (se repérer sur une ligne graduée, tracer un segment de longueur donnée)

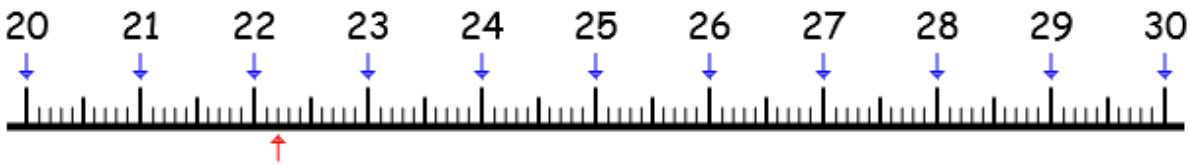
Exercice 1 : Mesure en cm et en mm.



⇒ _____



⇒ _____



⇒ _____

Exercice 2 : Trace les segments demandés.

Un segment [AB] de 4 cm et 9 mm.

Un segment [ST] de 14 cm et 4 mm.

Un segment [LB] de 12 cm et 6 mm.